

Please write clearly in block capitals.

Centre number

--	--	--	--	--

Candidate number

--	--	--	--

Surname

---

Forename(s)

---

Candidate signature

---

I declare this is my own work.

# GCSE MATHEMATICS

# H

Higher Tier

Paper 3 Calculator

Monday 8 June 2020


Morning

Time allowed: 1 hour 30 minutes

## Materials

For this paper you must have:

- a calculator
- mathematical instruments.



## Instructions

- Use black ink or black ball-point pen. Draw diagrams in pencil.
- Fill in the boxes at the top of this page.
- Answer **all** questions.
- You must answer the questions in the spaces provided. Do not write outside the box around each page or on blank pages.
- If you need extra space for your answer(s), use the lined pages at the end of this book. Write the question number against your answer(s).
- Do all rough work in this book. Cross through any work you do not want to be marked.

## Information

- The marks for questions are shown in brackets.
- The maximum mark for this paper is 80.
- You may ask for more answer paper, graph paper and tracing paper. These must be tagged securely to this answer book.

For Examiner's Use	
Pages	Mark
2–3	
4–5	
6–7	
8–9	
10–11	
12–13	
14–15	
16–17	
18–19	
20–21	
22–23	
24–25	
26–27	
<b>TOTAL</b>	

## Advice

In all calculations, show clearly how you work out your answer.



Answer **all** questions in the spaces provided.

- 1** What does  $A \cup B$  represent in  $P(A \cup B)$ ?  
Circle your answer.

[1 mark]

A or B or both

A but not B

not A and not B

A and B

- 2** Circle the equation of the line that is parallel to  $y = \frac{1}{2}x + 3$

[1 mark]

$$y = -2x$$

$$y = 2x$$

$$y = \frac{1}{2}x$$

$$y = -\frac{1}{2}x$$

- 3** Work out 320 as a percentage of 80  
Circle your answer.

[1 mark]

25%

75%

300%

400%



- 4 A fair coin is spun four times.  
Circle the probability of getting four Heads.

[1 mark]

$\frac{1}{2}$

2

$\frac{1}{8}$

$\frac{1}{16}$

- 5 To the nearest 1000, there are 18 000 people at a festival.

- 5 (a) Write down the minimum possible number of people at the festival.

[1 mark]

Answer \_\_\_\_\_

- 5 (b) Write down the maximum possible number of people at the festival.

[1 mark]

Answer \_\_\_\_\_

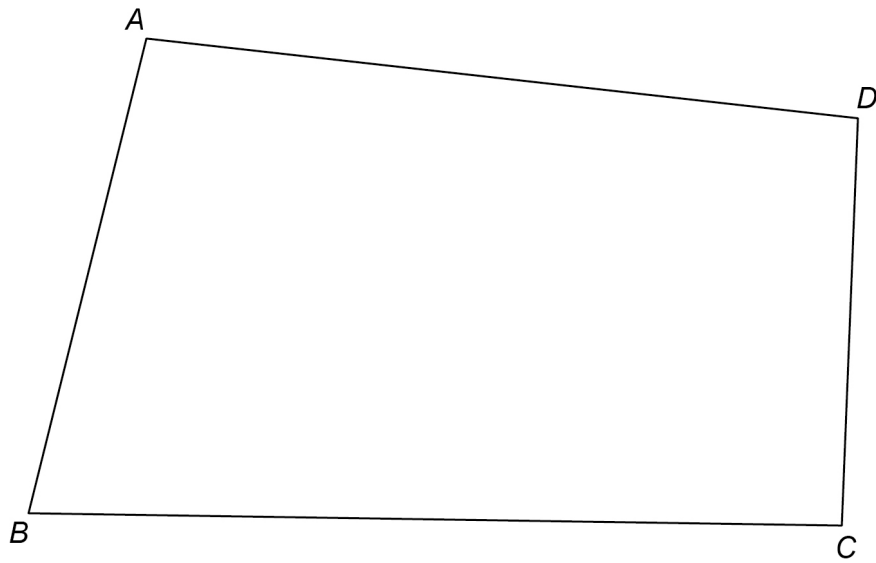
Turn over for the next question

Turn over ►



6

$ABCD$  represents the plan of a field.



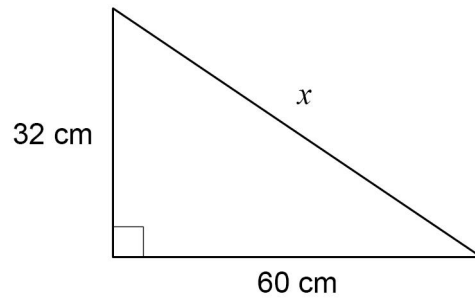
There is a path across the field that  
starts at  $B$   
is the same distance from  $BA$  and  $BC$ .

Using ruler and compasses, show the position of the path.

[2 marks]



- 7 Use Pythagoras' theorem to work out the value of  $x$ .



Not drawn  
accurately

[3 marks]

---

---

---

---

---

Answer \_\_\_\_\_ cm

Turn over for the next question



8

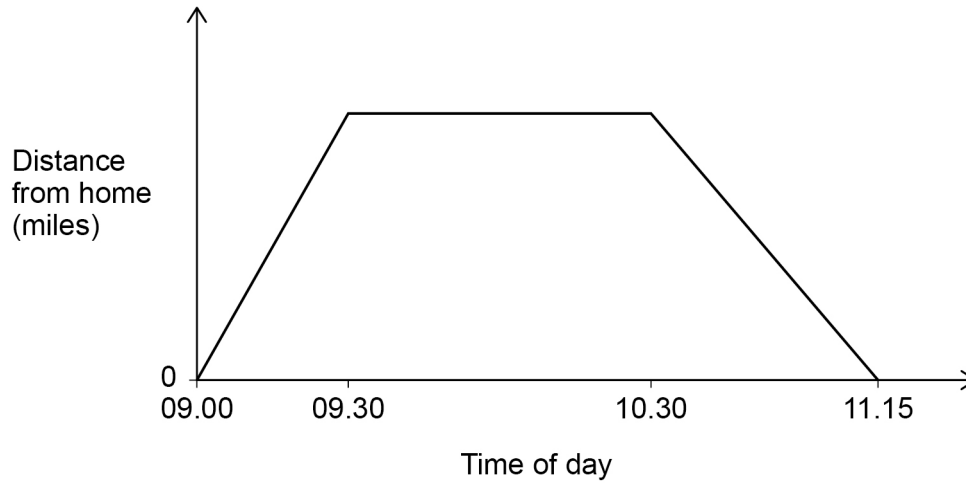
Chris visits a library.

He cycles to the library in half an hour at a speed of 12 miles per hour.

He stays at the library for one hour.

He then cycles home.

The sketch graph represents his visit.



Work out the speed, in miles per hour, at which Chris cycles home.

**[3 marks]**

---

---

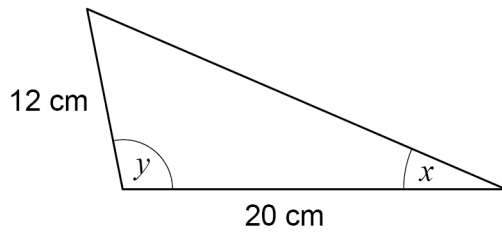
---

---

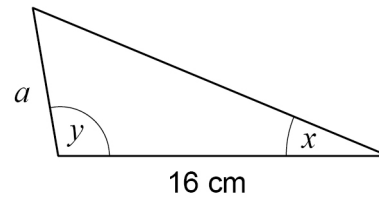
Answer \_\_\_\_\_ mph



- 9 These two triangles are similar.



Not drawn  
accurately



Work out the value of  $a$ .

[2 marks]

---



---



---

Answer \_\_\_\_\_ cm

- 10 Expand and simplify fully  $4(2c + 3) - (5c - 1)$

[2 marks]

---



---



---



---

Answer \_\_\_\_\_



**11** A spinner can land on red, blue or green.

After 350 spins

relative frequency of red = 0.18

relative frequency of blue = 0.62

Work out the number of times the spinner landed on green.

**[3 marks]**

---

---

---

---

Answer \_\_\_\_\_



- 12 Here is some information about 26 houses.  
 $a$ ,  $b$  and  $c$  are all **different** numbers.

Number of bedrooms	Number of houses
1	7
2	$a$
3	$b$
4	$c$
5	8

The median number of bedrooms is 3.5

Work out a possible set of values for  $a$ ,  $b$  and  $c$ .

[3 marks]

---



---



---



---

$a =$  \_\_\_\_\_

$b =$  \_\_\_\_\_

$c =$  \_\_\_\_\_



13 (a) Simplify  $\frac{25a}{8} \times \frac{2a}{5}$

Give your answer as a single fraction in its simplest form.

[2 marks]

---

---

---

---

Answer \_\_\_\_\_

13 (b) Sofia is trying to simplify  $\frac{6c + 10}{2}$

Her method is

divide  $6c$  by 2

then

add 10

Evaluate her method.

[1 mark]

---

---

---





15 Solve  $4 > 11 - \frac{x}{3}$

[2 marks]

---



---



---



---

Answer \_\_\_\_\_

16 The number of goals scored by 20 players in a season is shown.

Number of goals	Frequency	Midpoint	
0 to 4	6		
5 to 9	11		
10 to 14	3		
Total = 20			

Work out an estimate of the mean number of goals per player.

Give your answer as a decimal.

[3 marks]

---



---



---



---



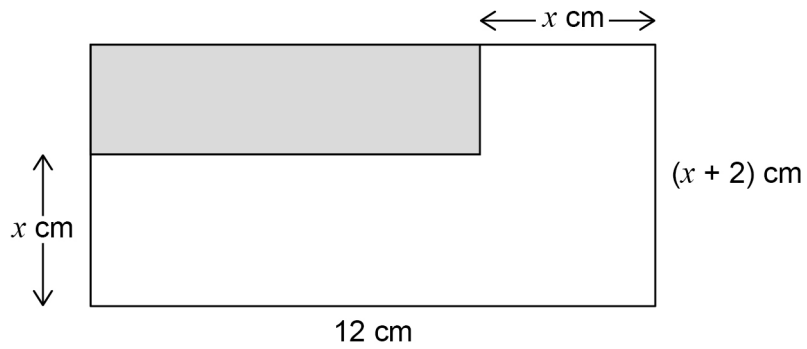
---

Answer \_\_\_\_\_



17

Here are two rectangles.

Not drawn  
accurately

The area of the shaded rectangle is  $\frac{1}{4}$  the area of the large rectangle.

Work out the value of  $x$ .

**[4 marks]**


---



---



---



---



---



---



---



---



---



---

Answer \_\_\_\_\_



18

The pressure in a tyre is 30 pounds per square inch.

Convert the pressure into kilograms per square centimetre.

Use 1 pound = 0.45 kilograms  
and  
1 inch = 2.54 centimetres

**[3 marks]**

---

---

---

---

---

---

---

---

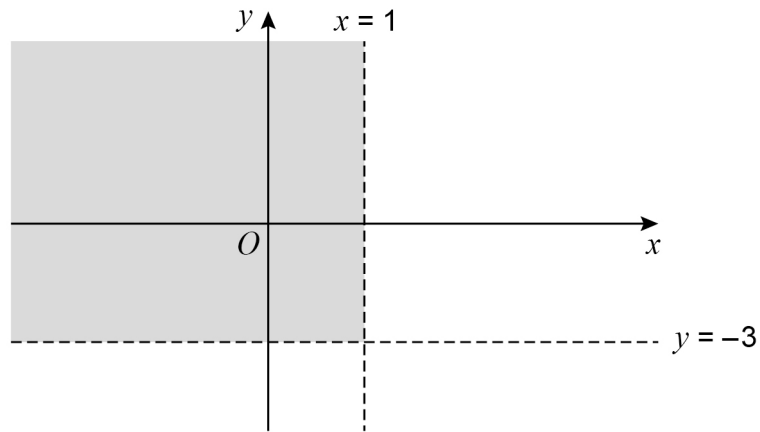
---

---

Answer \_\_\_\_\_ kg/cm<sup>2</sup>



- 19 The sketch shows the lines  $x = 1$  and  $y = -3$



Which pair of inequalities describes the shaded region?

Tick **one** box.

[1 mark]

$x < 1$  and  $y < -3$

$x < 1$  and  $y > -3$

$x > 1$  and  $y > -3$

$x > 1$  and  $y < -3$

Turn over for the next question

Turn over ►



20 Amari and Ben each play a game.

20 (a) Here is some information about Amari's scores.

Lowest 12

Highest 20

Lower quartile 13

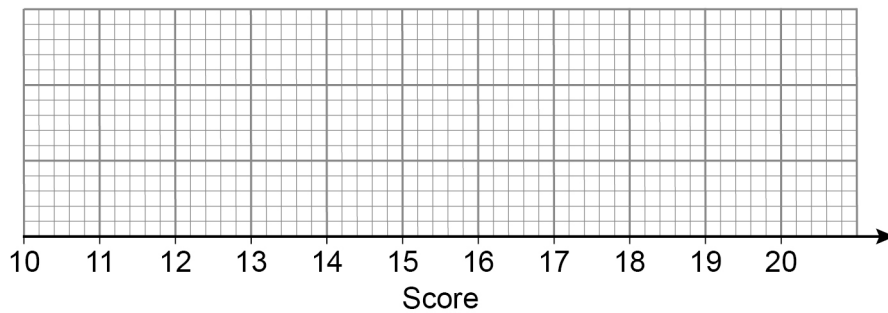
Upper quartile 19

Median 17

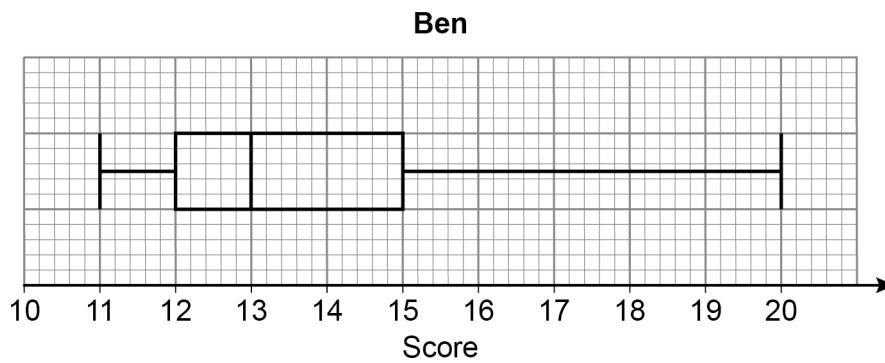
Draw a box plot to represent his scores.

[2 marks]

Amari



20 (b) This box plot represents Ben's scores.



Who had more consistent scores, Amari or Ben?

Work out the interquartile ranges to support your answer.

**[2 marks]**

---



---



---



---



---



---

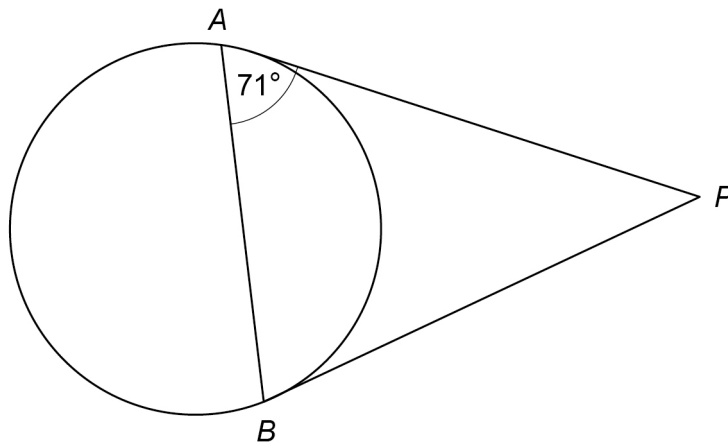


---

**Turn over for the next question**



- 21 (a)  $A$  and  $B$  are points on a circle.  
 $PA$  and  $PB$  are tangents.



Not drawn  
accurately

Work out the size of angle  $APB$ .

[2 marks]

---

---

---

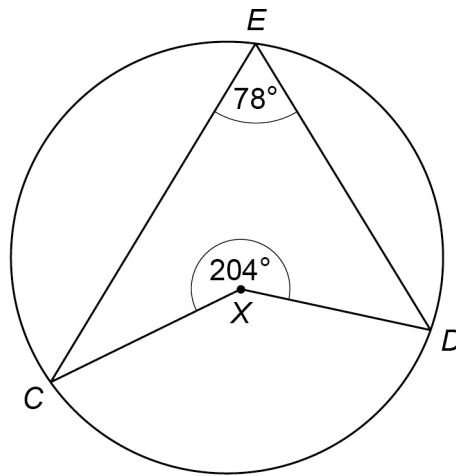
---

Answer \_\_\_\_\_ degrees



21 (b)  $C$ ,  $D$  and  $E$  are points on a different circle.

Not drawn  
accurately



Is  $X$  the centre of the circle?

Tick a box.

Yes

No

Show working to support your answer.

[2 marks]

---



---



---



---

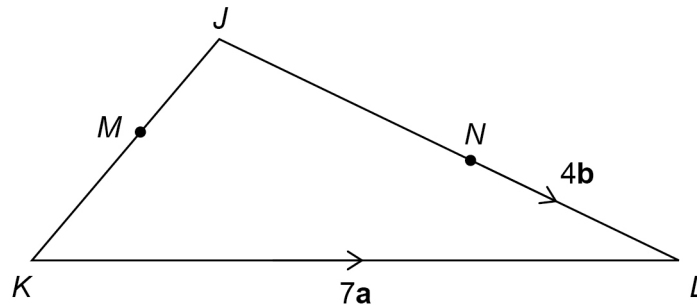
Turn over for the next question

Turn over ►





23

In triangle  $JKL$  $M$  is the midpoint of  $JK$  $JN : NL = 3 : 2$  $\vec{KL} = 7\mathbf{a}$       $\vec{NL} = 4\mathbf{b}$ Not drawn  
accuratelyWork out  $\vec{JM}$  in terms of  $\mathbf{a}$  and  $\mathbf{b}$ .

Give your answer in its simplest form.

**[3 marks]**


---



---



---



---



---

Answer \_\_\_\_\_

Turn over for the next question

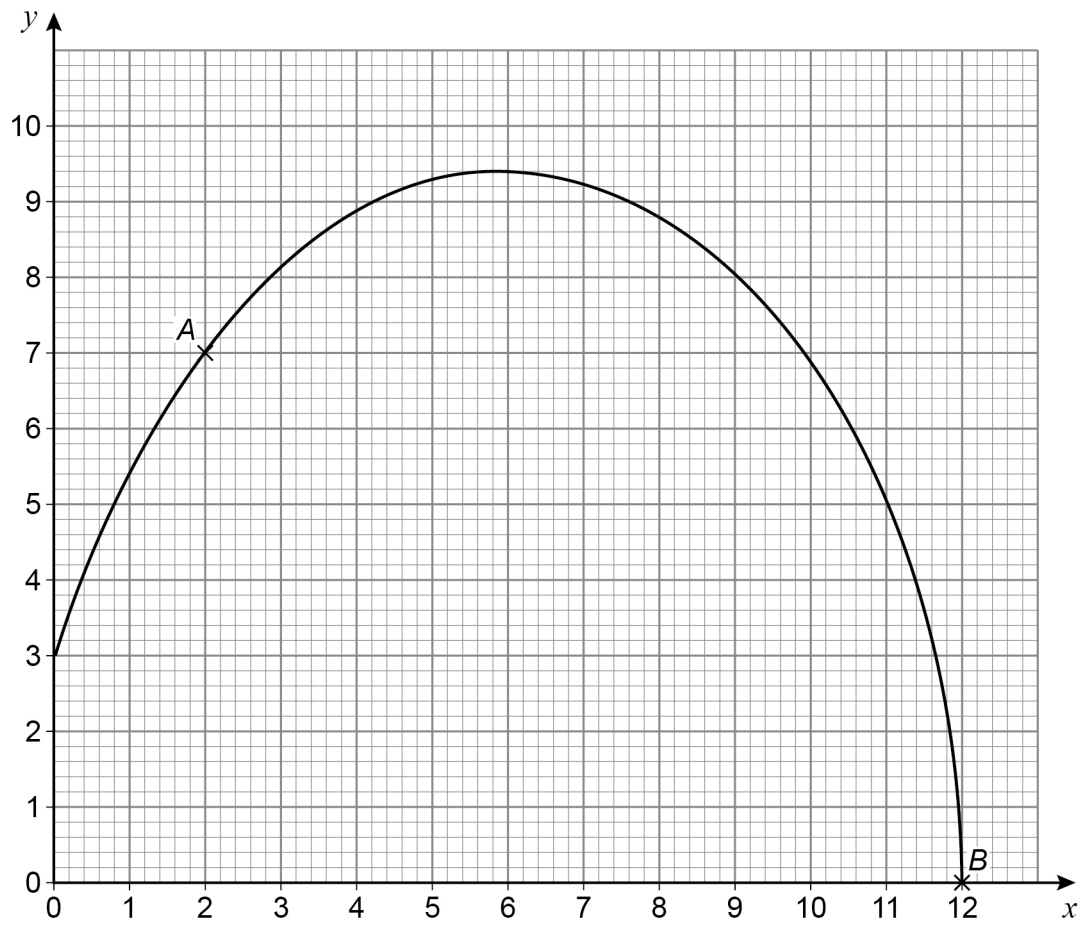
Turn over ►



24

$A$  and  $B$  are points on a curve.

$A$  is  $(2, 7)$       $B$  is  $(12, 0)$



24 (a) Work out the instantaneous rate of change of  $y$  with respect to  $x$  at point  $A$ .

[2 marks]

---



---



---



---

Answer \_\_\_\_\_



24 (b) The average rate of change of  $y$  with respect to  $x$  between points  $A$  and  $B$  is worked out.

Which statement is correct?

Tick **one** box.

[1 mark]

It is positive.

It is zero.

It is negative.

You cannot tell if it is positive or negative.

25 The equation of a circle is  $x^2 + y^2 = 9$

Work out the length of the **diameter**.

Circle your answer.

[1 mark]

3

6

9

18

Turn over for the next question

Turn over ►



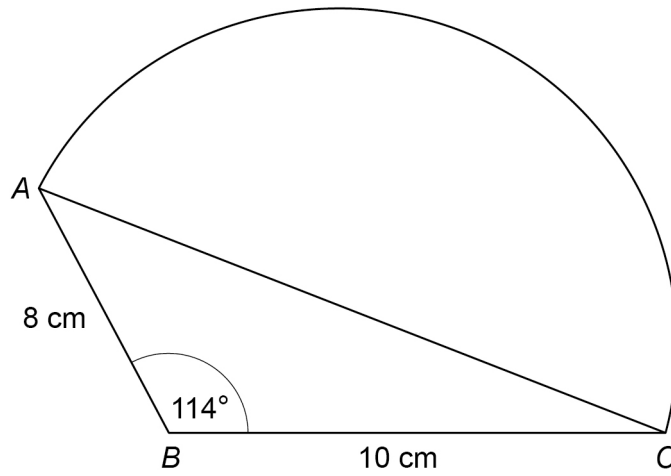




29

A shape is made by joining triangle  $ABC$  to a semicircle with diameter  $AC$ .

Not drawn  
accurately



Work out the **total** area of the shape.

[5 marks]

---



---



---



---



---



---



---



---



---



---



---



---



---



---



---



---



---



---



---



---



---



---

Answer \_\_\_\_\_  $\text{cm}^2$



